

COONABARABRAN HIGH SCHOOL

NOTIFICATION OF ASSESSMENT TASK: Year 7 Music

SUBJECT: Elements of Music Test

TEACHER: A. Rossler

VALUE: 25%

DATE OF ASSESSMENT: Friday 27 October 2017

TASK DETAILS: Write an in-class test on the elements of music. The assessment will cover the work listed below.

You need to know the names of these signs:



Treble Clef



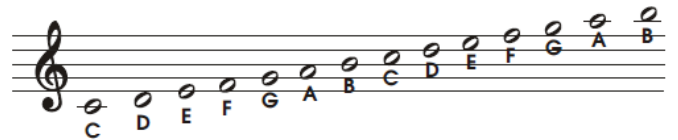
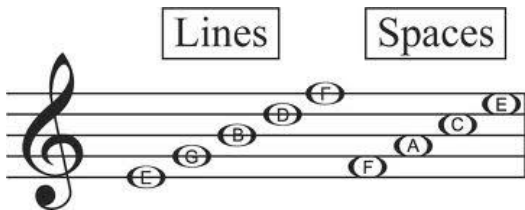
Bass Clef




Flat

Sharp

You need to know the names of the lines and spaces in the treble clef:



You need to know the names of the following signs in music:





Two Crotchets per bar



Three crotchets per bar



Four crotchets per bar

You need to know the value of each note (how many beats it is held for):

| Notes | Name | How many beats? |
|-------|--------------|---------------------------------|
| | Quavers | $\frac{1}{2} + \frac{1}{2} = 1$ |
| | Dotted Minim | 3 |
| | Minim | 2 |
| | Crotchet | 1 |
| | Semibreve | 4 |

= Pie

= Piz-za

= Pep-pe-ro-ni