

COONABARABRAN HIGH SCHOOL

NOTIFICATION OF ASSESSMENT TASK: Year 7B and 7C Music

SUBJECT: Elements of Music Test

TEACHER: A. Rossler

VALUE: 15%

DATE OF ASSESSMENT: Friday 26 October 2018

TASK DETAILS: Write an in-class test on the elements of music. The assessment will cover the work listed below.

You need to know the names of these signs:



Treble Clef



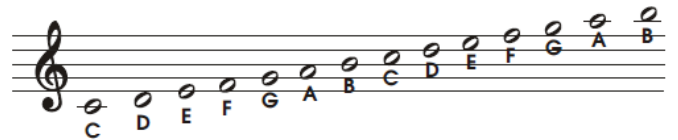
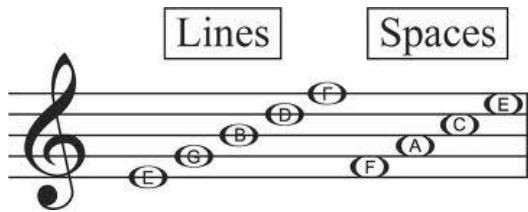
Bass Clef




Flat

Sharp

You need to know the names of the lines and spaces in the treble clef:



You need to know the names of the following signs in music:





Two Crotchets per bar









Three crotchets per bar




Four crotchets per bar

You need to know the value of each note (how many beats it is held for):

Notes	Name	How many beats?
	Quavers	$\frac{1}{2} + \frac{1}{2} = 1$
	Dotted Minim	3
	Minim	2
	Crotchet	1
	Semibreve	4

 = Pie

 = Piz-za

 = Pep-pe-ro-ni