



Coonabarabran High School

ASSESSMENT NOTIFICATION

Subject: Year 8A and 8D Music
Teacher: Mrs Rossler
Topic: In-class test – Elements of Music
Weighting: 10%
Date: Year 8A: Monday 20 May 2019
Year 8D: Tuesday 21 May 2019

TASK DETAILS: Write an in-class test on the elements of music. The assessment will cover the work listed below.

You need to know the names of these signs:



Treble Clef



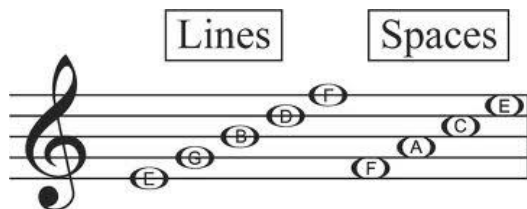
Bass Clef



Flat

Sharp

You need to know the names of the lines and spaces in the treble clef and the bass clef:

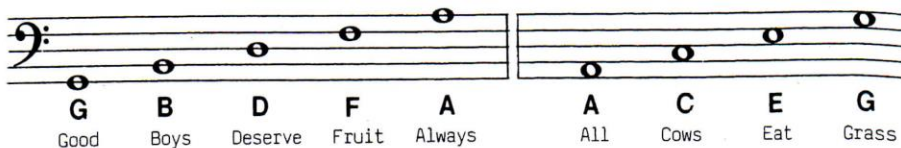


Lines

Spaces

Lines = Every **G**ood **B**ird **D**oes **F**ly

Spaces ☺ = **F** **A** **C** **E**



Good

Boys

Deserve

Fruit

Always


All

Cows

Eat

Grass

You need to know the names of the following signs in music:



Time Signature

Bar-line

Bar



Two Crotchets per bar



Three crotchets per bar



Four crotchets per bar

You need to know the value of each note (how many beats it is held for) as well as the proper name for each:

Notes	Name	How many beats?
	Quavers	$\frac{1}{2} + \frac{1}{2} = 1$
	Dotted Minim	3
	Minim	2
	Crotchet	1
	Semibreve	4

You need to know the value of each rest (how many beats it is held for):

Symbol	English	American	Silence Duration*
	Semibreve Rest	Whole Rest	4 Counts
	Minim Rest	Half Rest	2 Counts
	Crotchet Rest	Quarter Rest	1 Count

You need to know the following terms:

p Softly

f Loudly

allegro Quick

adagio Slowly

moderato At a moderate speed

= Pie

= Piz-za

= Pep-pe-ro-ni